

PERIODIC TEST I- 2022-2023

Name: _____

Grade: I

Subject: Maths

Date: 15-7-2022


Time: 1 ½ Hr

**Marks
obtained:**

Total:20


I. Write whether the following is true or false.

(5X1=5)




The pencil is shorter than the crayon. _____

2.





The eraser is longer than the sharpener. _____

3.



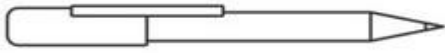
The boy is taller than the girl. _____

4.



The coconut tree is taller than the apple tree. _____

5.





Pencil and pen are equal in length. _____

II. Answer the following.

(2x1=2)

6. Colour the tallest and circle the shortest building.



7. Colour the longest and circle the shortest pen.



III. Match the following.

(3X1=3)

8.



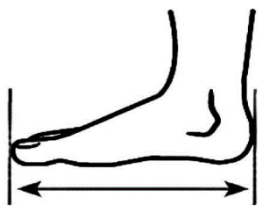
Foot span

9.



Hand span

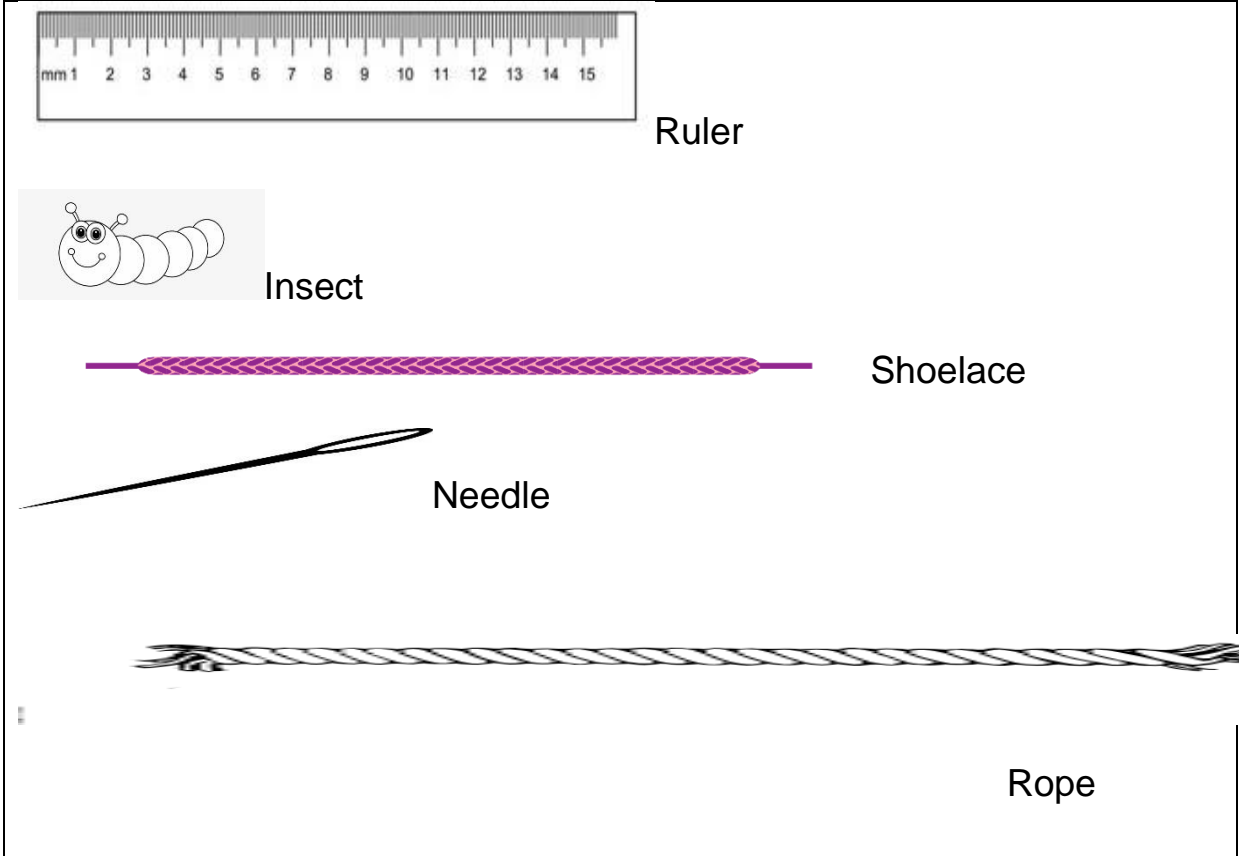
10.



Cubit

IV. Arrange the objects shown in the images in order from the longest to the shortest. (1X5=5)

11.



Ruler

Insect

Shoelace

Needle

Rope

Longest

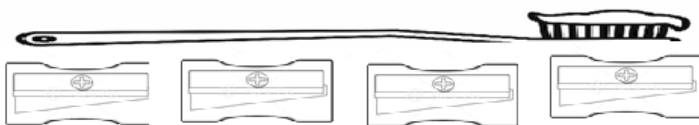
Shortest

--	--	--	--	--


V. Fill in the blanks.

(3 X1 = 3)

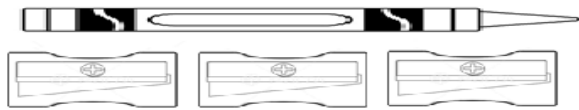
12. The length of toothbrush is _____ sharpners.



13. The length of comb is _____ sharpeners.



14. The length of crayon is _____ sharpeners.



VI. Draw the picture of one tallest animal and one shortest animal.

(1x2=2)